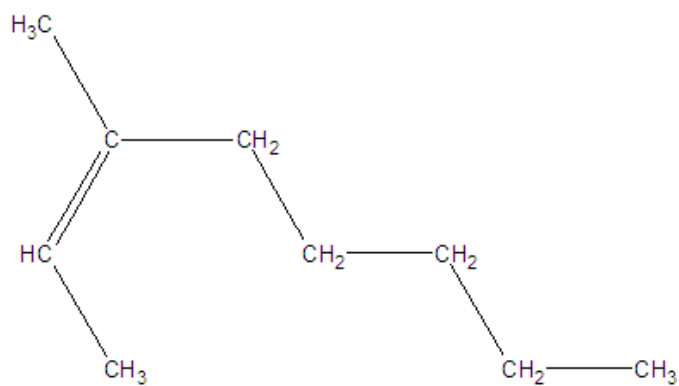


Chemistry 11 Worksheet – Organic Chemistry: Alkanes, Alkenes and Alkynes

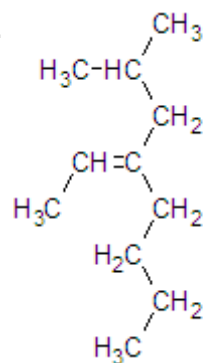
Name: _____

Name These ☺

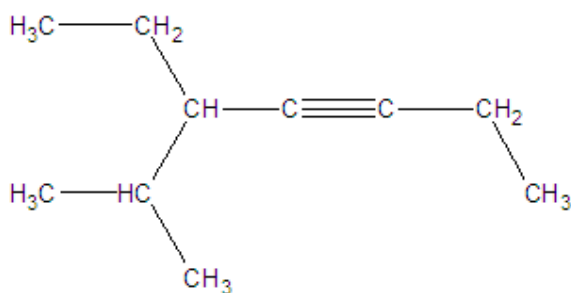
1.



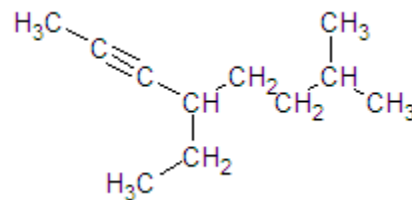
4.



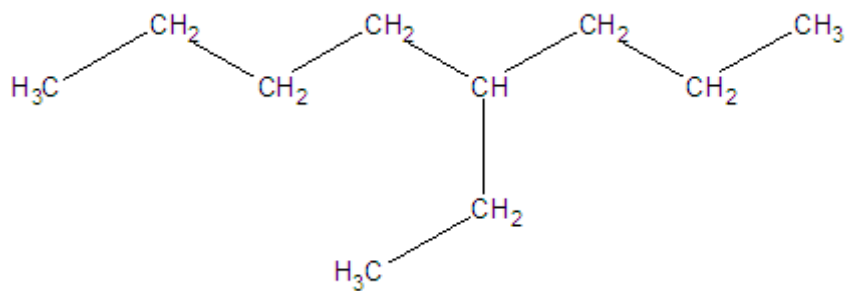
2.



5.



3.



Draw These ☺

6. 5-ethyl-2-heptyne

7. 4,4-diethyl-1-hexyne

8. 3-methyl-2-pentene

9. 4-isopropyldecane

10. Write balanced equations for the reactions involving the following substances:

a) 1-butene and bromine (substitution)

b) propane and oxygen (combustion)