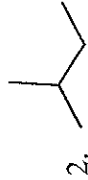


Worksheet: Naming and Drawing Alkanes

For each alkane write the correct IUPAC name



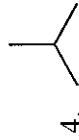
2-methylpentane



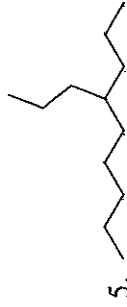
2-methylbutane



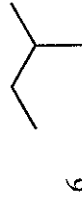
butane



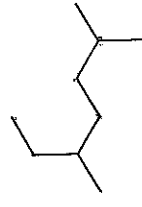
methylpropane



4-propylnonane



2-methylbutane



2,5-dimethylheptane



3-methylhexane

For each, draw a structural diagram (line, condensed or complete)

